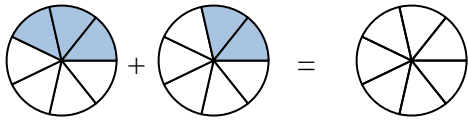




Shade in the fraction to solve the problem.

Answers

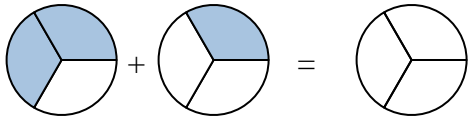
Ex)



Ex. $\frac{3}{7}$ $\frac{2}{7}$ $\frac{5}{7}$

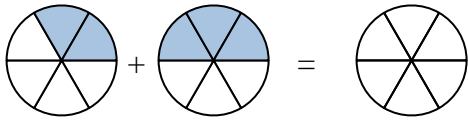
1. _____

1)



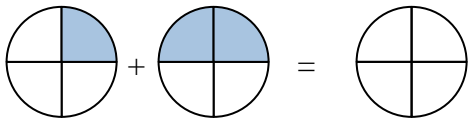
2. _____

2)



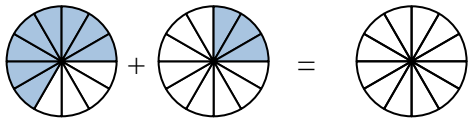
3. _____

3)



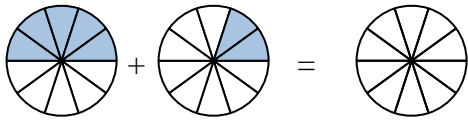
4. _____

4)



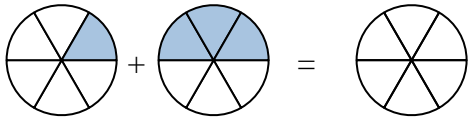
5. _____

5)



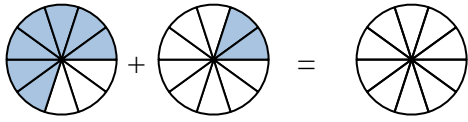
6. _____

6)



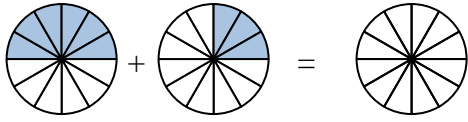
7. _____

7)



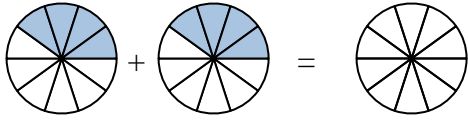
8. _____

8)



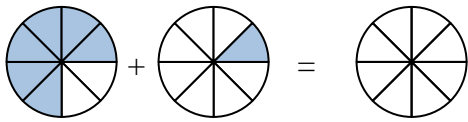
9. _____

9)



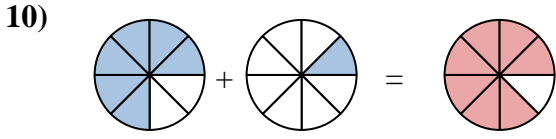
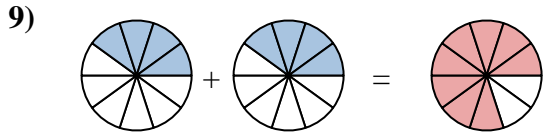
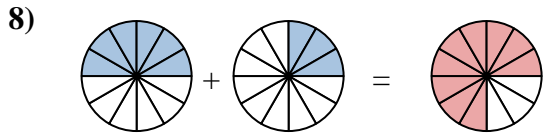
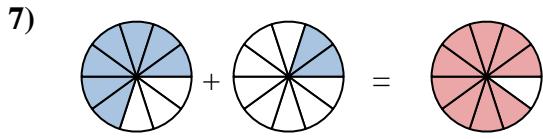
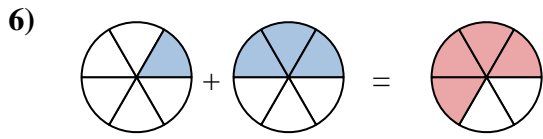
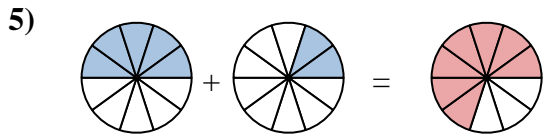
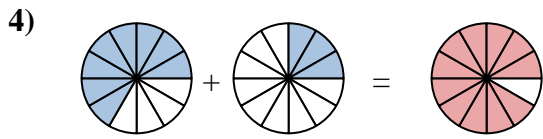
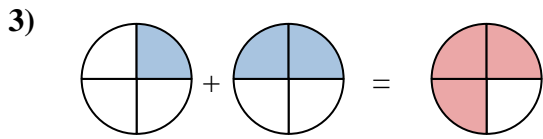
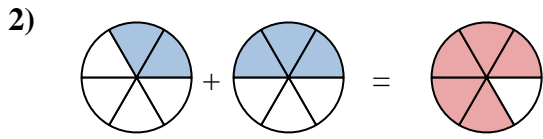
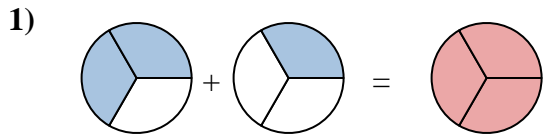
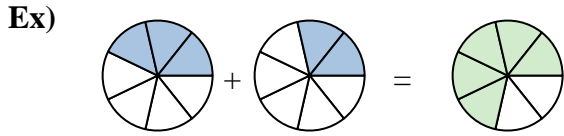
10. _____

10)





Shade in the fraction to solve the problem.



Answers

Ex.	$\frac{3}{7}$	$\frac{2}{7}$	$\frac{5}{7}$
1.	$\frac{2}{3}$	$\frac{1}{3}$	$\frac{3}{3}$
2.	$\frac{2}{6}$	$\frac{3}{6}$	$\frac{5}{6}$
3.	$\frac{1}{4}$	$\frac{2}{4}$	$\frac{3}{4}$
4.	$\frac{8}{12}$	$\frac{3}{12}$	$\frac{11}{12}$
5.	$\frac{5}{10}$	$\frac{2}{10}$	$\frac{7}{10}$
6.	$\frac{1}{6}$	$\frac{3}{6}$	$\frac{4}{6}$
7.	$\frac{7}{10}$	$\frac{2}{10}$	$\frac{9}{10}$
8.	$\frac{6}{12}$	$\frac{3}{12}$	$\frac{9}{12}$
9.	$\frac{4}{10}$	$\frac{4}{10}$	$\frac{8}{10}$
10.	$\frac{6}{8}$	$\frac{1}{8}$	$\frac{7}{8}$